

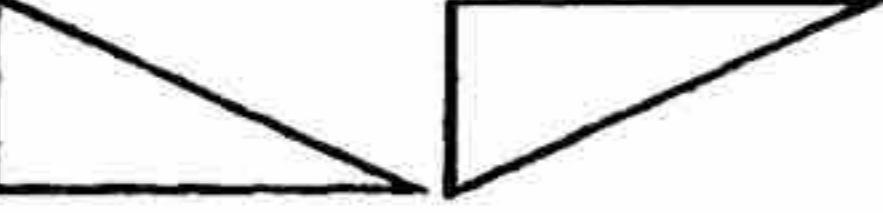



$300,000 + 40,000$
 $+ 6,000 + 100 +$
 $50 + 2 =$

34,652
 436,125
 346,152
 3,462



Which pair of figures is **NOT** congruent?
 (same size, same shape)

A 
B 
C 
D 

Deb's math book has 421 pages. Her spelling book has 276, and her science book has 352 pages. Her math book has how many more pages than her science book?

Solve.

8,850
- 2,472

Use the model to show how to subtract 6 tens. What numeral is left?

$4 \times 3 = \square \times 6$
 $25 - 5 = \square \times 4$
 $6 \times 5 = 26 + \square$

To make \$3.47 you would need:
 (Answers will vary.)

_____ dollar bills
 _____ quarters
 _____ dimes
 _____ nickels
 _____ pennies

Continue the pattern.

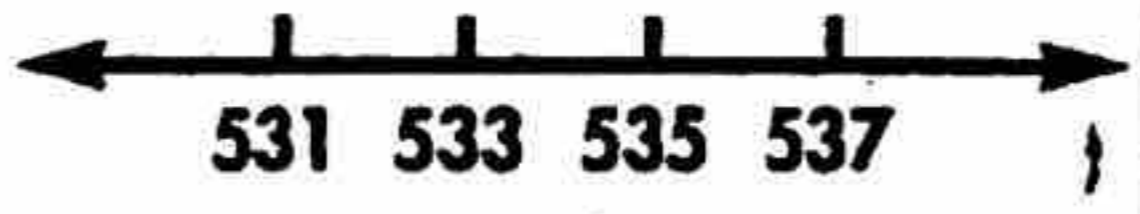
25, 27, 30, 32, 35, 37, 40

_____, _____, _____

Which is an even number that is less than 5,620 but more than 4,996?

5,644
 5,328
 4,986
 6,248

What is the perimeter of a square that measures 8 inches on one side?



This number line shows

the odd numbers between 530 and 539.
 the even numbers between 530 and 540.
 the odd numbers between 527 and 540.

Solve.

2,640
- 1,569

Hen	Eggs laid
Goldy	OOOO
Red	OOOOOOOO
Sal	OOOO
Lulu	OOO

Each O = 20 eggs

Add symbols to the graph to show that Goldy laid 80 more eggs than Lulu.

In a horse race, Champ is 4 lengths ahead of Prince. Prince is 6 lengths behind Jetta. Star is 3 lengths ahead of Jetta. How many lengths is Champ behind Star?

What might be reasonable dimensions for the size of a kitchen?

20 in. x 30 in.
 10 ft. x 14 ft.
 10 miles x 14 miles

Which shows the most accurate way to estimate the sum of 231 and 482?

380 + 500
 400 + 300
 230 + 480

1

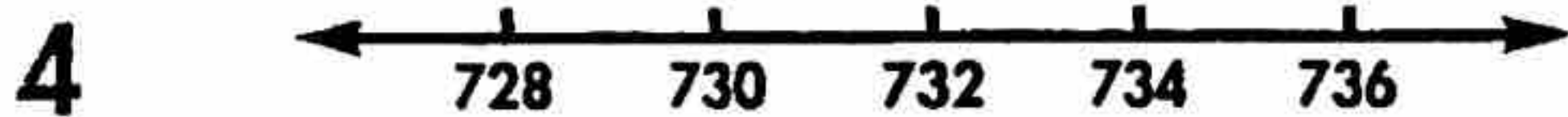
$$\begin{array}{r} 3,310 \\ - 1,084 \\ \hline \end{array}$$

2

$$\begin{array}{r} 9,760 \\ - 8,299 \\ \hline \end{array}$$

3 Continue the pattern.
69, 74, 78, 83, 87, 92

_____, _____, _____

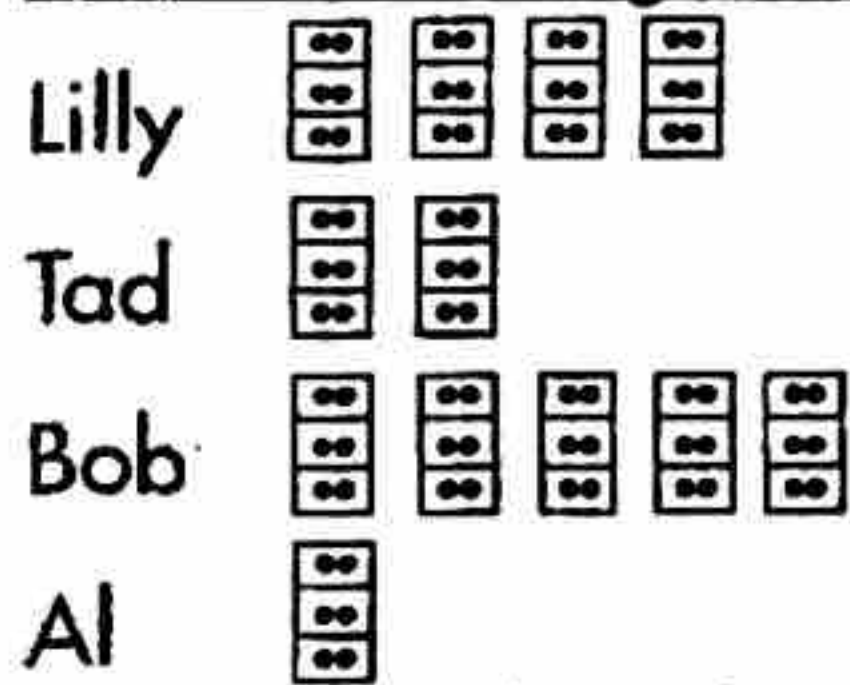


This number line shows

- the even numbers between 730 and 740.
- the even numbers between 726 and 738.
- the odd numbers between 725 and 739.

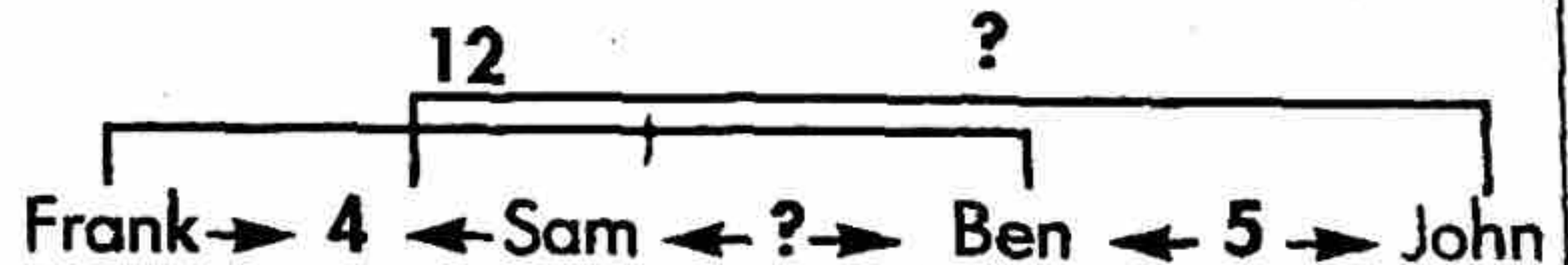
5 Steve collected 741 stamps. Steve's grandfather collected 672 stamps. Steve's father collected 523 stamps. How many more stamps did Steve collect than his father? (Show your solution sentence.)

6 Student Pages Read = 25 pages



Add symbols to the graph to show that Tad read 75 more pages than Al.

7 In a marathon race, Ben was 5 meters ahead of John. Frank was 12 meters ahead of Ben, and Sam was 4 meters behind Frank. Use the chart to find out how many meters ahead of John was Sam?



8 What is the perimeter of a square that measures 12 centimeters on one side?

9 $900,000 + 50,000 + 3,000 + 700 + 20 + 6 =$

- 95,372
- 9,326
- 935,726
- 953,726

10 What might be reasonable dimensions for a bedroom?

15 inches x 20 inches

15 miles x 20 miles

15 feet x 20 feet