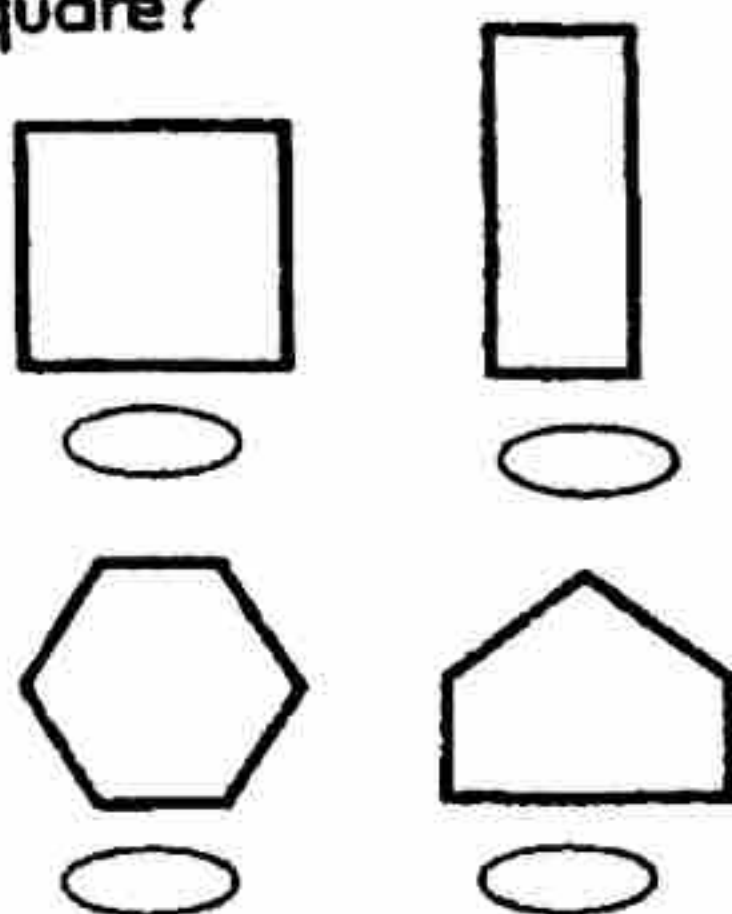


Which numeral has 8 in the ten thousands place?

- 48,201
 82,490
 93,801
 73,786

Which shape is a square?



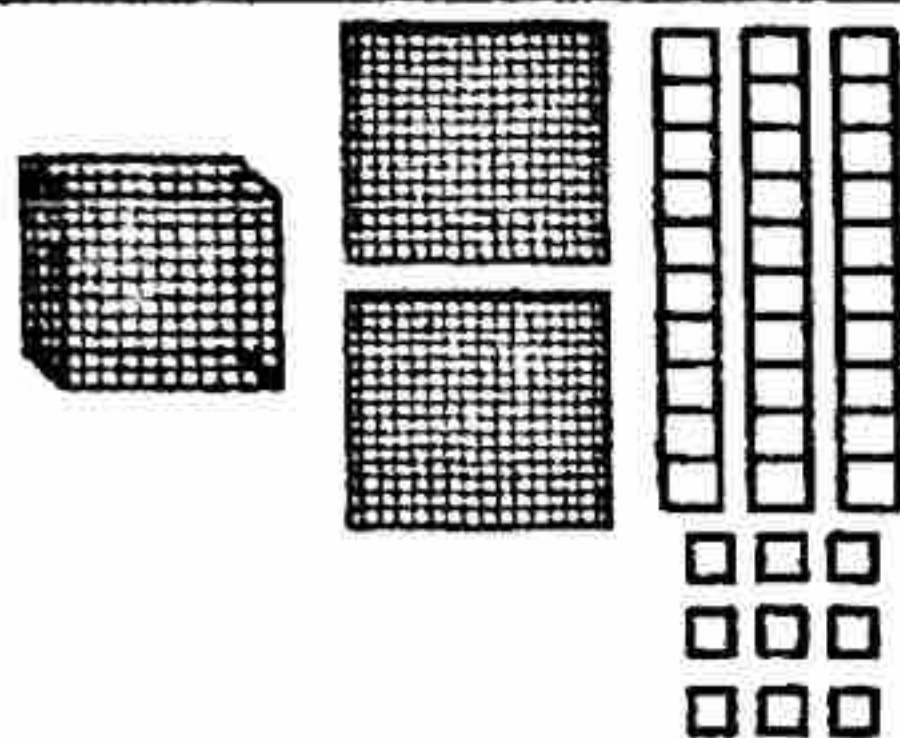
Bill had 562 shells. He gave 130 to his friend Mark. How many shells does Bill now have? (Show your solution sentence.)

$4 + 7 =$

$13 - 4 =$

$8 + 5 =$

$15 - 6 =$



What numeral is shown by the base ten models?

Write the 3 other related facts for

$5 + 6 = 11$

What is the value of 3 quarters, 3 dimes, and 2 nickels?



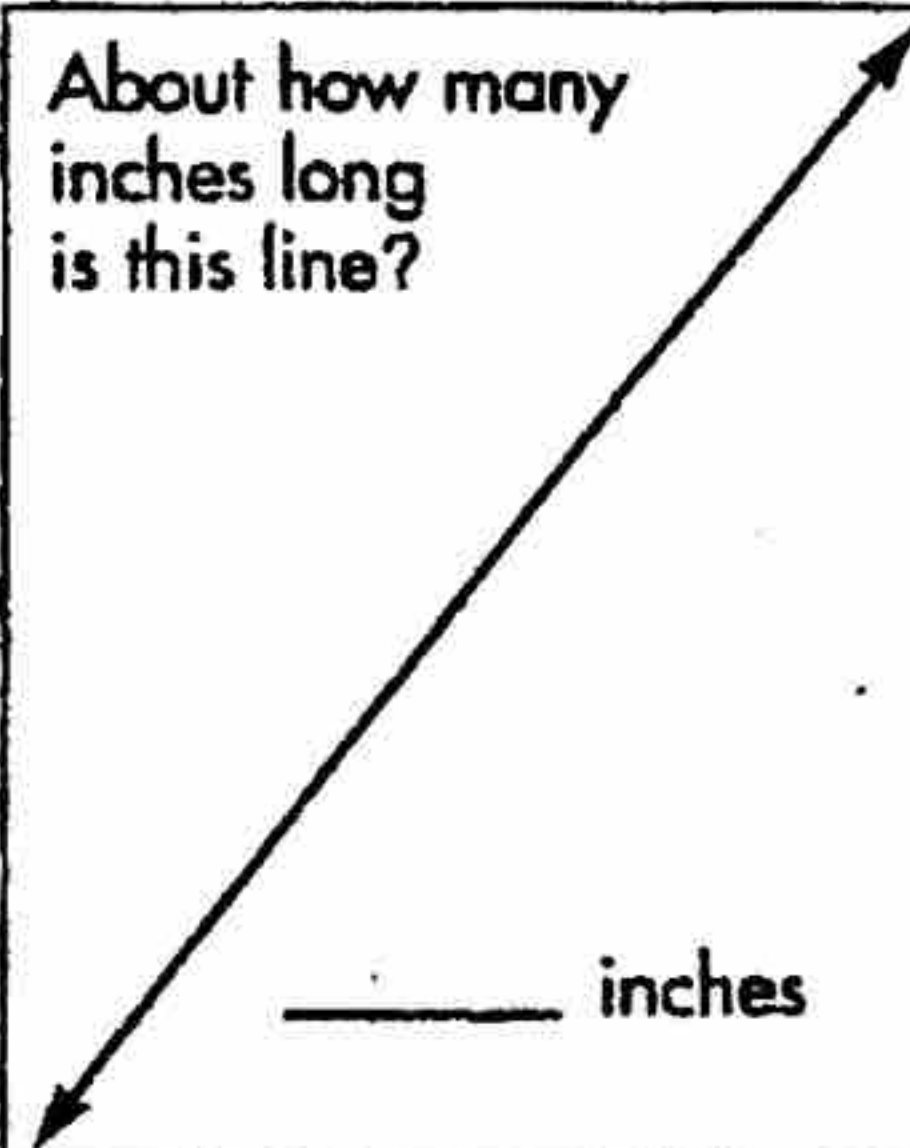
Continue the pattern.

32, 27, 22, 17

Write these numerals in order from greatest to least.

- 6,120 _____
- 6,967 _____
- 5,629 _____
- 6,994 _____
- 5,792 _____

About how many inches long is this line?




This number line shows:

- $14 - 4 + 10$
 $7 + 4 = 11$
 $11 - 5 = 6$
 $8 + 3 = 11$

Solve.

$$\begin{array}{r} 835 \\ - 321 \\ \hline \end{array}$$

Mark the true statements.



- A is 3 less than C.
 B is 20 less than A.
 $A + B = 100$
 B is more than A.

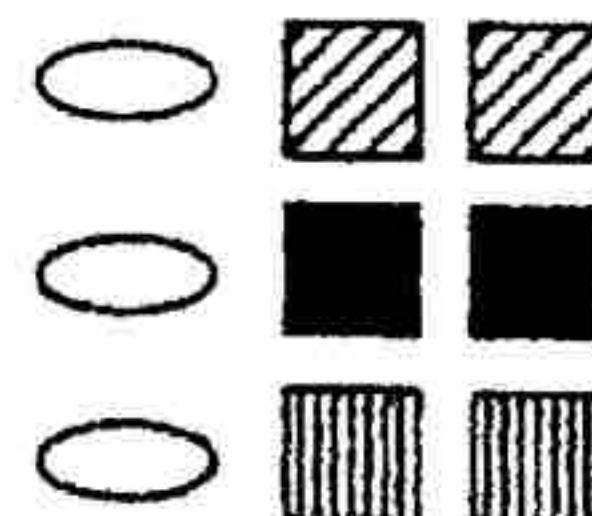
The church, library, school, and museum are all on Maple Street. The church is 7 miles east of the library, and the museum is 8 miles to the west. The school is 4 miles to the west of the museum. How far is it from the church to the school?

_____ miles

About how many birthday hats come in a package?

- 20
 200
 2
 200

These tiles are in a box. If you drew out two without looking, you could possibly draw...



1

$$\begin{array}{r} 736 \\ - 420 \\ \hline \end{array}$$

2

$$11 - 7 = \square$$

$$13 - 5 = \square$$

$$9 + 6 = \square$$

3 Continue the pattern.
37, 31, 25, 19
_____, _____, _____

4

This number line shows:

$9 + 9 = 18$ $16 - 9 = 7$

$8 + 5 = 13$ $9 + 7 = 16$

5 Amber built a domino train with 378 dominoes. When she pushed the first domino 237 dominoes fell. How many dominoes were left standing?

6 Which statement is true for this graph?

A B C

0 20 40 60 80 100 120 140

$B = 2$

C is 60 more than B

C is 100 less than A

7 Coleytown is 10 miles to the east of Midtown and 7 miles to the west of Oakview. Cape City is 4 miles to the west of Midtown. What is the distance in miles from Cape City to Oakview?

8 About how many inches long is this line?

1 inch

7 inches

2 inches

4 inches

9 Which numeral has a 4 in the thousands place?

143,122

412,720

234,876

211,453

10

What numeral is shown by the base ten models?