

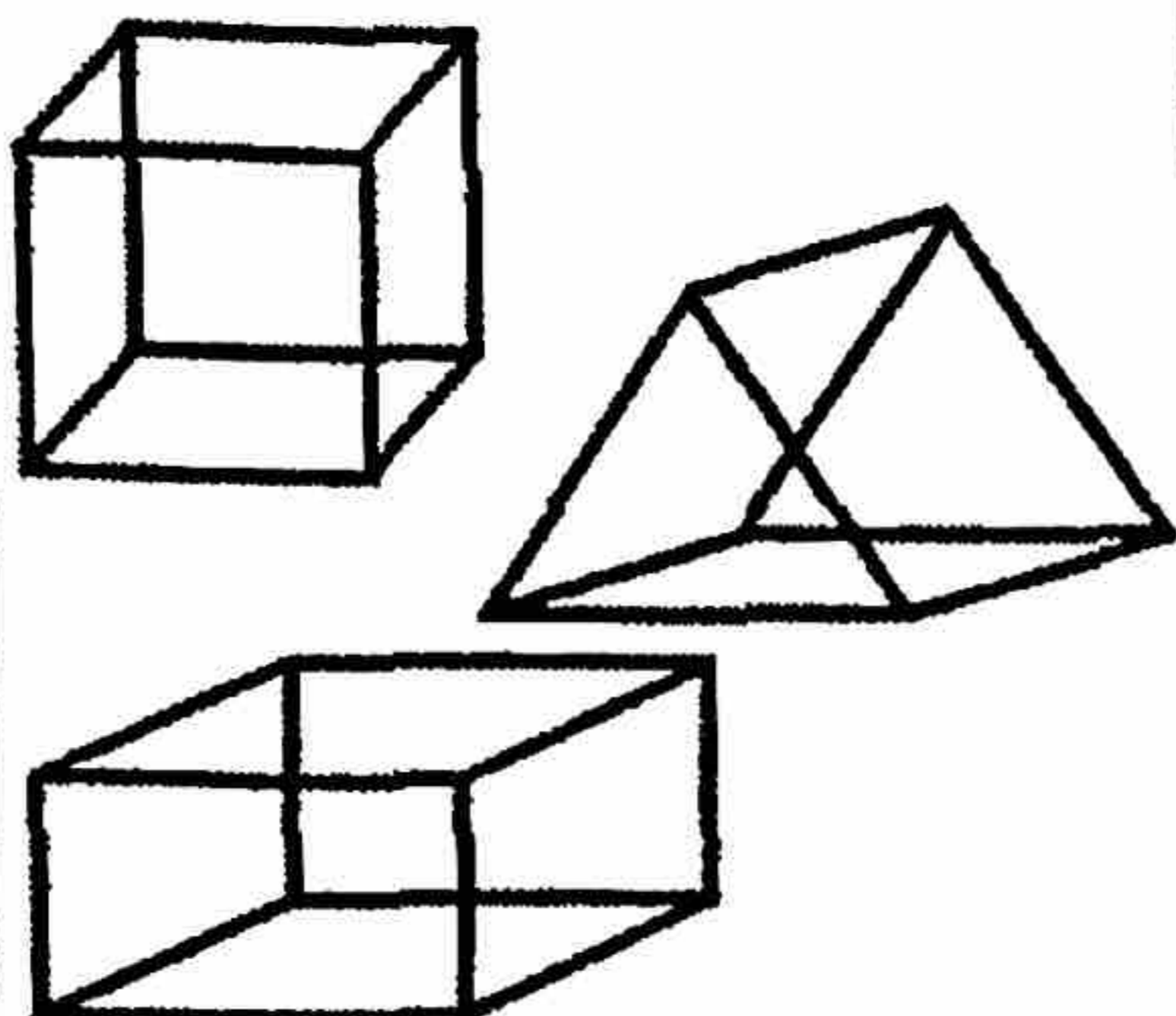
In the numeral **872,391**

the **7** is in the _____ place

the **3** is in the _____ place

the **8** is in the _____ place

Circle the shape that best represents a rectangular prism.




The student council sold 32 cupcakes and 25 brownies at the bake sale. They also sold 12 pies. How many baked goods did the student council sell? (Show your solution sentence.)

$4 \times 2 =$

$11 - 8 =$

$3 \times 3 =$

$15 - 6 =$



After adding 7 more tens to this model, the numeral shown would be:

Which is **NOT** a related fact?

$9 + 3 = 12$

$3 + 9 = 12$

$12 - 7 = 5$

$12 - 9 = 3$

Jim spent \$4.13 on a kite and 2 quarters to play a video game. Show how to find the amount of money Jim spent.

Continue the pattern.

220, 215, 210, 205

Use $>$ or $<$.

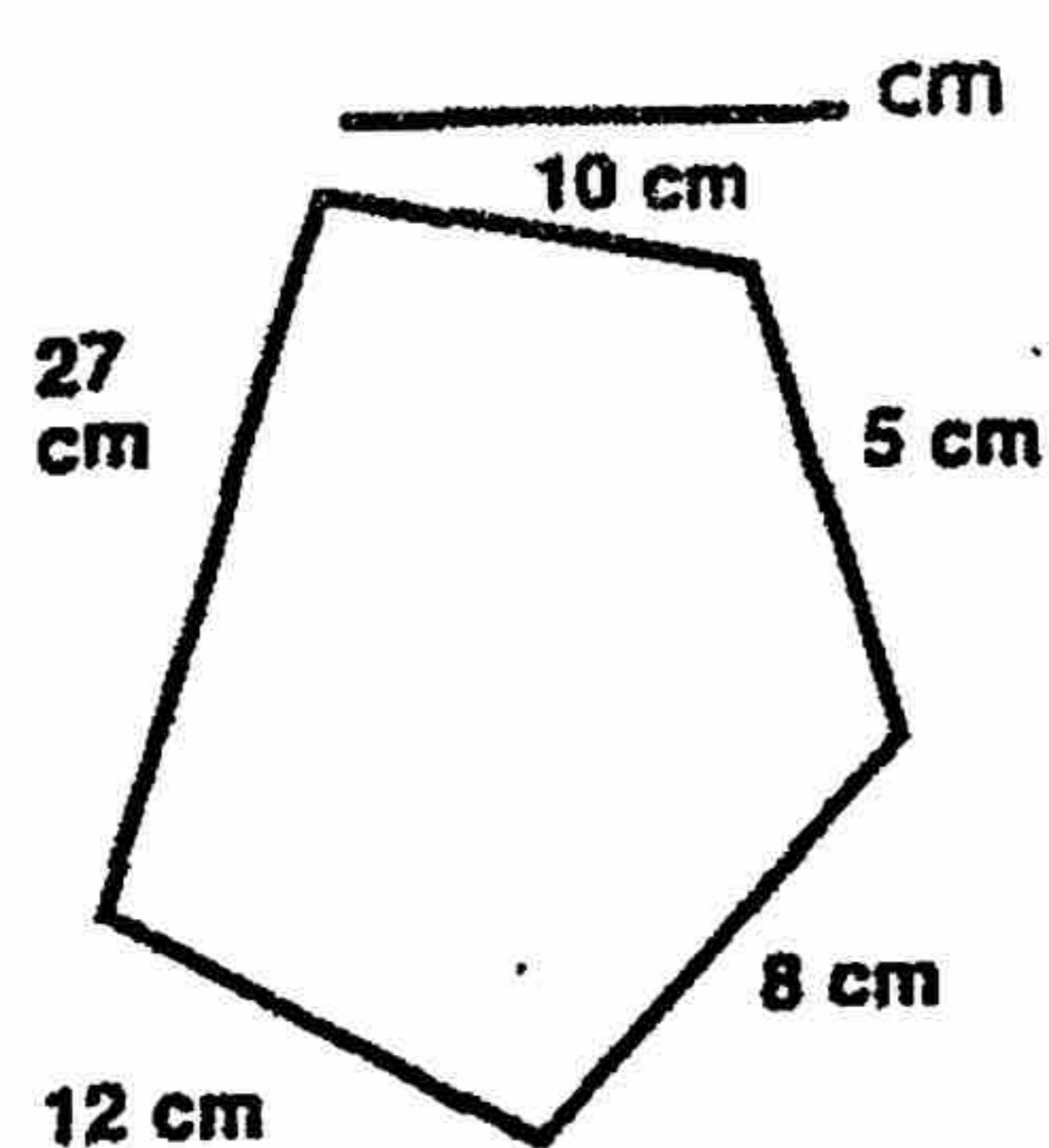
23,534 **23,530**

9,967 **3,987**

75,629 **104,629**

894 **8,004**

What is the perimeter of this shape?



Write the numeral for the number words.

two hundred five thousand, one hundred nineteen

nine hundred thousand, six hundred five

Solve.

$$\begin{array}{r} 2,757 \\ + 6,229 \\ \hline \end{array}$$

GRADE	Number of	
	boys	girls
3	115	103
4	98	92
5	125	112
6	107	111

Which grade has 10 more boys than grade 3?

? ? Mystery Numbers ? ?

$A = C - D$

$B = D - 2$

$C = B + B$

D = the difference between 24 and 14.

$A = \underline{\quad\quad} \quad B = \underline{\quad\quad}$

$C = \underline{\quad\quad} \quad D = \underline{\quad\quad}$

Solve using front-end estimation.

23,734

42,120

12,256

15,607

If you pitched a penny 20 times onto the board below, the penny would most likely land on the numbers _____ and _____ the least often.

7	3	5	7
7	5	2	7
5	2	1	5

1

$$\begin{array}{r} 4,609 \\ + 3,285 \\ \hline \end{array}$$

2

$2 \times 6 =$

$11 - 3 =$

$3 \times 5 =$

3

Continue the pattern.

206, 203, 200, 197

_____, _____, _____

4

Write the numeral for the number words.

 two hundred seventy-one thousand,
four hundred nine _____

 one hundred four thousand,
three hundred six _____

5

 Which pair are **NOT** related facts?

$2 + 7 = 9$ $9 - 6 = 3$

$12 - 9 = 3$ $3 + 9 = 12$

$9 - 8 = 1$ $9 - 1 = 8$

$10 - 6 = 4$ $6 + 4 = 10$

6

Team Scores in Weekly Bowling Tournament

Day	Stars	Jets
Saturday	327	152
Sunday	478	599
Wednesday	432	557
Friday	455	422

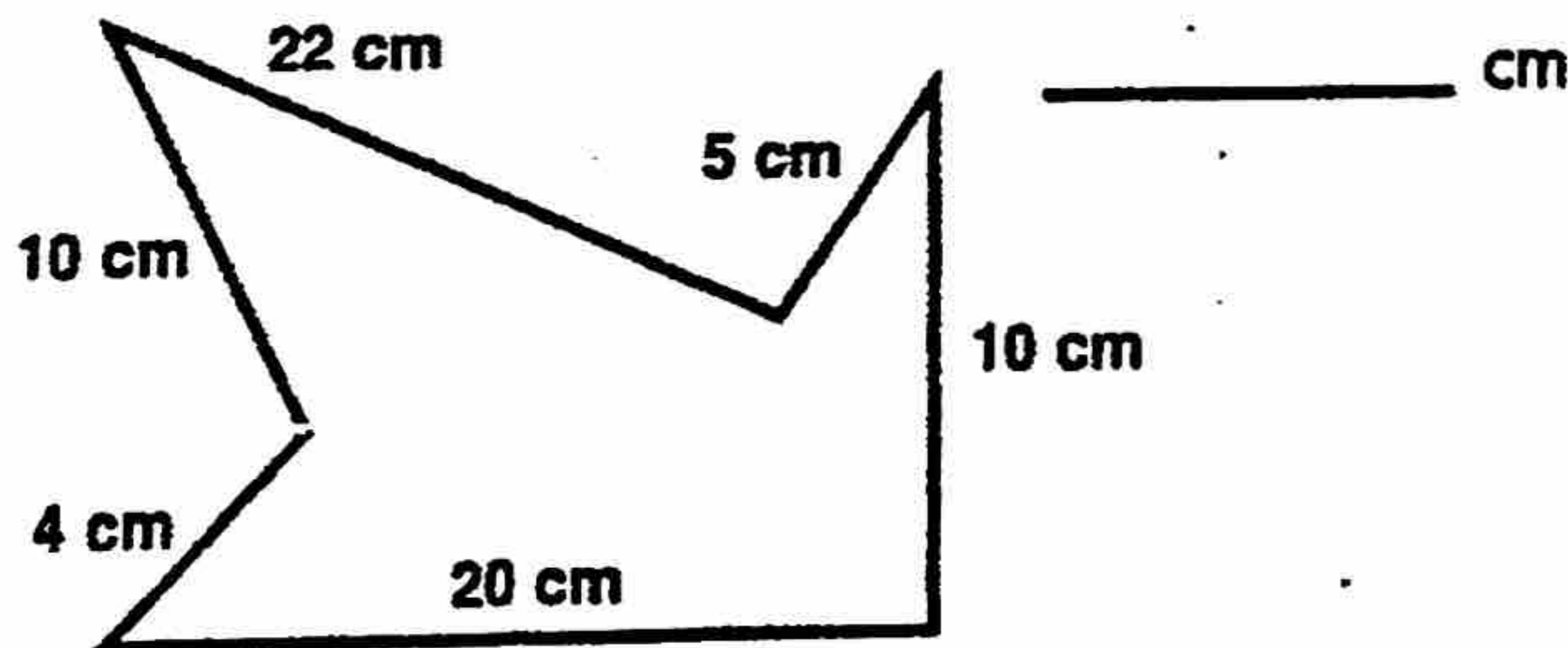
On which day did the Jets have 125 more points than the Stars? _____

7

Hannah spent \$1.25 on popcorn and 6 dimes on candy at the movies. Show how to find the amount of money she spent.

8

What is the perimeter of this shape? _____ cm


9

 In the numeral **568,120**

 The **8** is in the _____ place.

 The **2** is in the _____ place.

 The **5** is in the _____ place.

10

After adding 8 more tens to this model, the numeral shown would be _____.

